



6 **Ecris les nombres.**

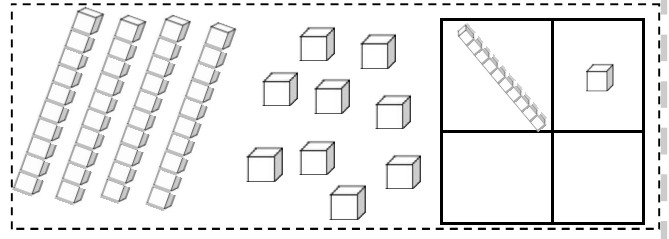
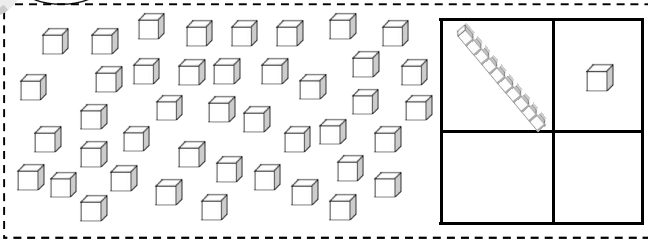
19 - 25 - 18 - 32 - 5

23 - 27 - 16 - 31 - 26



7 **Ecris les nombres.**

entoures



8 **Dessine les pièces et/ou les billets.**



22 €

② 5

5 10 10

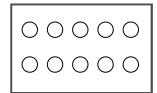
• 32 €

• 42 €

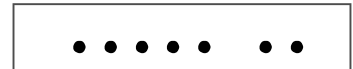



9 **Ecris la table des doubles.**

..... + = | + = | + = | + = | + =



10 **Complète les soustractions.**



9 - 1 =

9 - 2 =

9 - 3 =

8 - 4 =

8 - 5 =

8 - 6 =

7 - 7 =

7 - 0 =

7 - 1 =

11 **Ecris le résultat des additions.**

6 + 3 + 4 =

2 + 0 =

6 + 5 =

7 + 3 - 5 =

6 + 0 + 1 =

2 + 1 =

7 + 5 =

8 + 2 - 5 =

6 + 2 + 2 =

2 + 2 =

8 + 5 =

3 + 7 - 3 =

6 + 3 + 1 =

2 + 3 =

9 + 5 =

2 + 8 - 9 =

